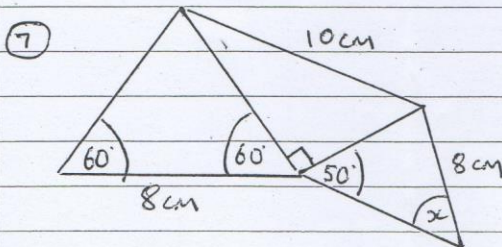
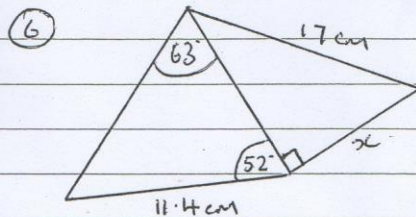
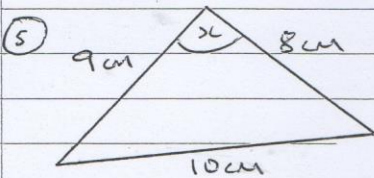
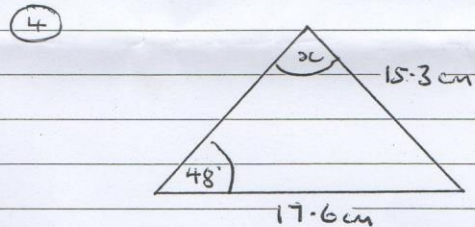
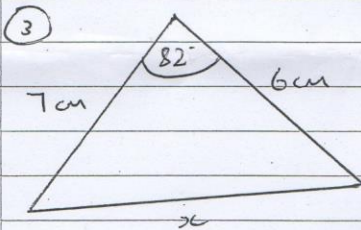
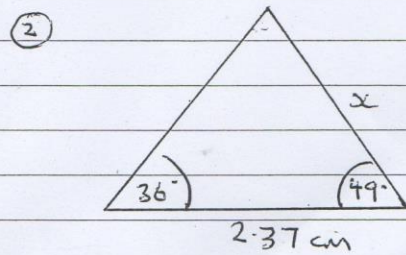
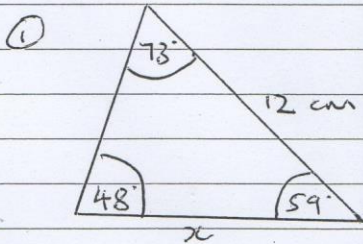


SINE RULE

Calculate the value of x in the following diagrams.

In some cases, the sine rule is not the most appropriate method. You may leave these questions out or use another method if you know one.



CROSS OUT THE CORRECT ANSWERS.
REARRANGE THE LETTERS OF THE WRONG ANSWERS TO MAKE A BOYS NAME

B=11.2 C=58.7 D=15.4
H=1.4 I=35.1 K=121.3
R=144.9 O=162.2 T=9.94
Y=31.6 E=12.43